

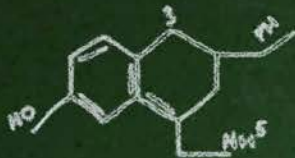
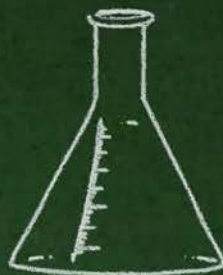



$$\sqrt{5}$$



$$x^2 - \sqrt{y}$$

$$\begin{array}{r} 16 \\ - 8 \\ \hline \end{array}$$

С Днем
гуманера!



$$ac^2 + bc^2 =$$

